

# Education Programme

## Year 1 Maths Challenge



### Question 1

What comes next?

1



2



3




Answer: \_\_\_\_\_

### Question 2

What comes next?


2



4



6




Answer: \_\_\_\_\_


### Question 3

What comes next?


9



7



5



Answer: \_\_\_\_\_

Illustrations: Credit Mike Langman (rspb-images.com)

Thank you for helping to conserve the Isle of Man's wild birds and their habitats

# Education Programme

## Year 1 Maths Challenge



### Question 4


How many birds are in this picture?



Answer: \_\_\_\_\_

### Question 5




How many nests can you count?



Answer: \_\_\_\_\_

### Question 6

Can you do these additions?



Illustrations: Credit Mike Langman (rspb-images.com)  
Nest images: Credit Pinterest

Thank you for helping to conserve the Isle of Man's wild birds and their habitats

# Education Programme

## Year 1 Maths Challenge



### Question 7

Circle which bird has the longest body.

29cm



39cm



45cm



### Question 8

Circle which bird lays the most eggs.

8 eggs



10 eggs



5 eggs



### Question 9

Circle which bird lays the least eggs.

2 eggs



3 eggs



1 egg



Illustrations: Credit Mike Langman (rspb-images.com)

Thank you for helping to conserve the Isle of Man's wild birds and their habitats

# Education Programme

## Year 1 Maths Challenge



Answers:

- |                   |         |
|-------------------|---------|
| <b>Question 1</b> | 4       |
| <b>Question 2</b> | 8       |
| <b>Question 3</b> | 3       |
| <b>Question 4</b> | 8       |
| <b>Question 5</b> | 6       |
| <b>Question 6</b> | 6       |
|                   | 3       |
|                   | 8       |
|                   | 6       |
| <b>Question 7</b> | 45cm    |
| <b>Question 8</b> | 10 eggs |
| <b>Question 9</b> | 1 egg   |

Thank you for helping to conserve the Isle of Man's wild birds and their habitats