

Education Programme

Reception Maths Challenge




Question 1

How many birds can you count?



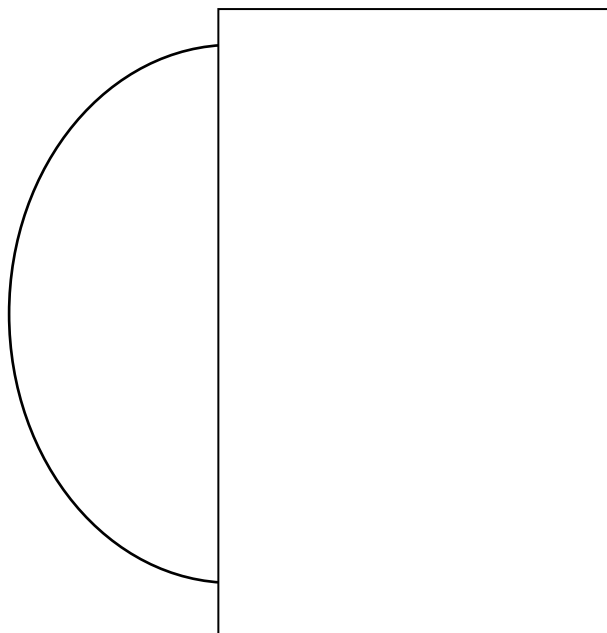
Question 2

How many nests can you count?



Question 3

Draw the other half of the egg in the box



Illustrations: Credit Mike Langman (rspb-images.com)
Nest images: Credit Pinterest

Thank you for helping to conserve the Isle of Man's wild birds and their habitats



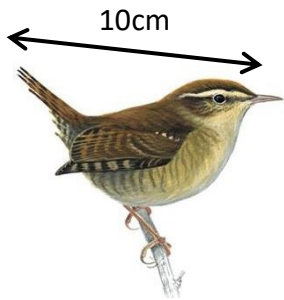
Education Programme

Reception Maths Challenge



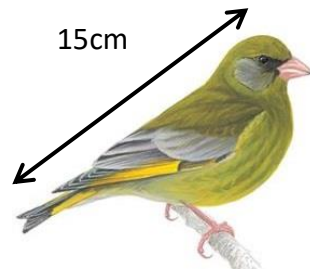
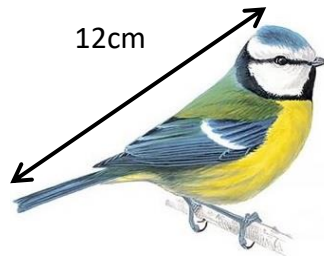
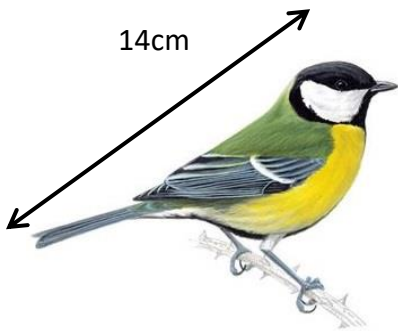
Question 4

Circle which bird is longest.



Question 5

Circle which bird is the shortest.



Question 6

Circle the two birds that are the same.



Question 7

Add the birds in the two boxes together.



+



=

Illustrations: Credit Mike Langman (rspb-images.com)
Nest images: Credit Pinterest

Thank you for helping to conserve the Isle of Man's wild birds and their habitats


Education Programme

Reception Maths Challenge



Question 8

Subtracting




Question 9

Adding



Question 10

Circle which bird has the longest beak.



Question 11

What number comes next?



1 2 3 4 5



Illustrations: Credit Mike Langman (rspp-images.com)

Thank you for helping to conserve the Isle of Man's wild birds and their habitats

Education Programme

Reception Maths Challenge



Question 1	6
Question 2	12
Question 3	-
Question 4	11cm
Question 5	12cm
Question 6	-
Question 7	5
Question 8	3
Question 9	3
Question 10	12cm
Question 11	6

Thank you for helping to conserve the Isle of Man's wild birds and their habitats